


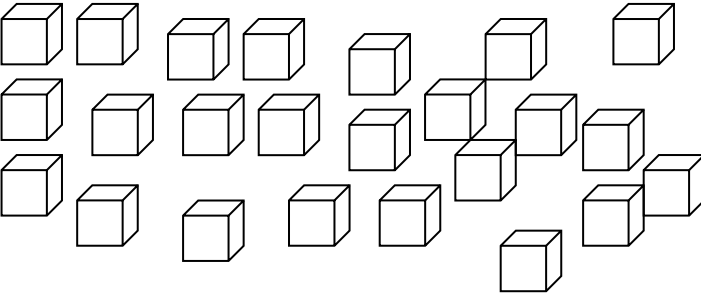

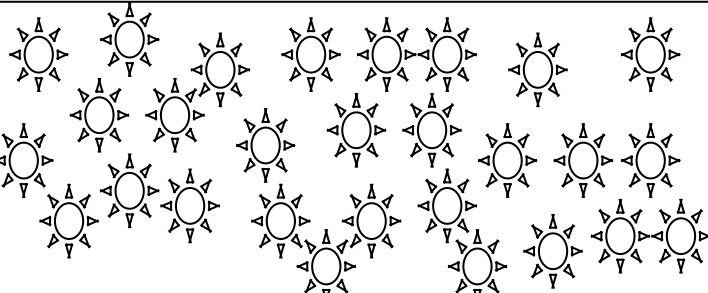


Find $\frac{1}{4}$ of an amount

I can 1) recognise one quarter as four equal parts 2) recognise that they must be equal 3) find quarter of an amount

Remember: 1 quarter is the same as half of 1 half.

 <p>Number _____</p> <p>$\frac{1}{2}$ _____</p> <p>$\frac{1}{4}$ _____</p>	 <p>Number _____</p> <p>$\frac{1}{2}$ _____</p> <p>$\frac{1}{4}$ _____</p>
 <p>Number _____</p> <p>$\frac{1}{2}$ _____</p> <p>$\frac{1}{4}$ _____</p>	 <p>Number _____</p> <p>$\frac{1}{2}$ _____</p> <p>$\frac{1}{4}$ _____</p>
 <p>Number _____</p> <p>$\frac{1}{2}$ _____</p> <p>$\frac{1}{4}$ _____</p>	 <p>Number _____</p> <p>$\frac{1}{2}$ _____</p> <p>$\frac{1}{4}$ _____</p>