

Year 2 Maths - Measurement: Measuring Mass (g)

Warm Up

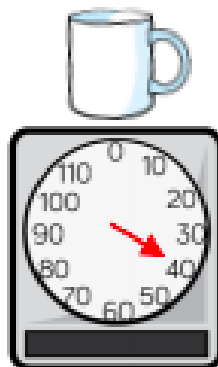


What does it mean when the scales are level?

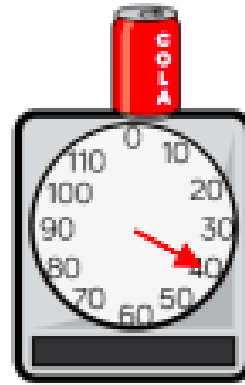
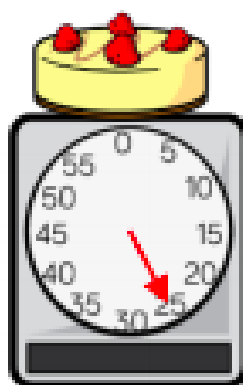
The apple weighs _____ grams.

What would 2 apples weigh?

Use scales to record the mass of objects in grams.



Order the items from heaviest to lightest.



Year 2 Maths - Measurement: Measuring Mass (g)

Activity:

How Many Grams?



_____ g



_____ g



_____ g



_____ g



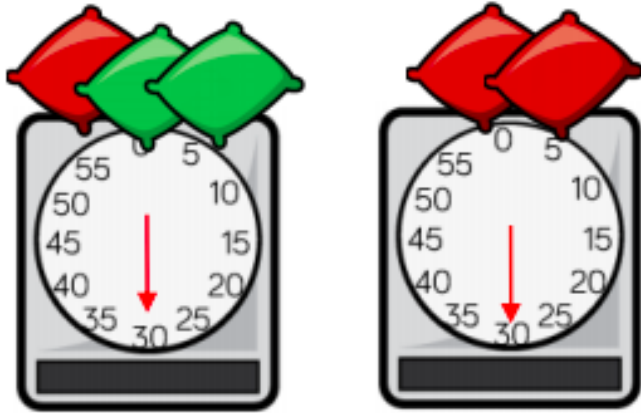
_____ g




_____ g

Year 2 Maths - Measurement: Measuring Mass (g)

Challenge: Reasoning and Problem Solving



Which is heavier, the red or the green beanbag?
Explain why.



The  weighs g.

The  weighs g.