

## Problems of the Day 2020


- 1 Here is how much it costs to go to the zoo.



Mr Jones and his 3 children go to the zoo.

How much does it cost them altogether?

- 2 These pairs of numbers all have the same total.



Work out the missing numbers.

- 1 Here is how much it costs to go to the zoo.



Mr Jones and his 3 children go to the zoo.



How much does it cost them altogether?

Mr Jones = £10

3 children = £5 + £5 + £5 or  $3 \times £5 = £15$

$£15 + £10 = £25$

- 2 These pairs of numbers all have the same total.



Work out the missing numbers.

Place value. Could use 10s/1s table or Place value counters or count on in 10s

$$50 + 30 = 80$$

$$20 + \underline{\quad} = 80 \quad 80 + \underline{\quad} = 80$$